

1. Write before /after/in between numbers:

a) ___ 8 ___ b) 4 ___ 6 c) ___ 3,4

d) ___ 5 ___ e) ___ 2 ___

f) ___ 9 ___

2. Write the missing numbers:

a)

11		13			16
----	--	----	--	--	----

b)

9		11	
---	--	----	--

c)

15		17	18		
----	--	----	----	--	--

d)

		20		
--	--	----	--	--

3. How many tens and extras in each number.

a) 7 is ___ ten ___ extras

b) 15 is ___ ten ___ extras

c) 18 is ___ ten ___ extras

d) 11 is ___ ten ___ extras

e) 16 is ___ ten ___ extras

4. Tick the numbers pair of 8.

a) 4 and 4

b) 1 and 5

c) 0 and 7

5. Tick the number pair of 6

a) 4 and 3

b) 5 and 2

c) 2 and 4

6. Draw the given number in the 5- frame. Write how many more or less is needed to make 5.

a) 4






How many to make 5 _____

b) 3



How many to make 5 _____

7. Write the number of balls 1 more and 1 less.

1 less	No of balls	1 more
		
		
		

8. Match the number name with the number.

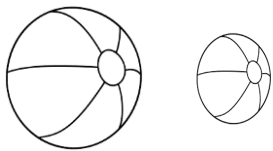
- | | | | |
|-------|----------|-------|----------|
| a. 13 | twenty | b. 19 | nine |
| 20 | nine | 11 | nineteen |
| 9 | ten | 10 | eleven |
| 10 | thirteen | 9 | ten |

9. Tick the number pair of 7.

- a) 3 and 3 b) 4 and 5 c) 1 and 6

10. Circle the smaller things.

a)



b)



c)




d)



11. Draw the given number in the 10 frame. write how many more or less is needed to make 10.



11



--	--	--	--	--

How many to make 10? _____

12. Make 5 in all:



13. Put the numbers 2 and 5 in the correct place.

a. Raju has _____ toys . He needs 3 toys more to make it _____.

b. I have 3 pencils. I need _____ to make _____.

14. Tina has 8 chocolates. She needs to give away _____ to make 4.

15. Circle the bigger things:

a)



b)



c)



d)



16. Complete the table:

	10frame	How many in all?	How many to make 10?										
a.	<table border="1"> <tr> <td>0</td> <td>0</td> <td>0</td> <td></td> <td></td> </tr> <tr> <td></td> <td></td> <td></td> <td></td> <td></td> </tr> </table>	0	0	0									
0	0	0											

b.	<table border="1"> <tr> <td></td><td></td><td></td><td></td><td></td> </tr> <tr> <td></td><td></td><td></td><td></td><td></td> </tr> </table>											6	

17. Write a name with more letters than the given name.

M	O	H	I	T					

18. Write the correct number and the number name.

	Number	Number name
Threeteen		
oneteen		

19. Make 10 balloons in all.



20. Make 8 flowers in all.